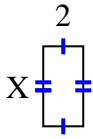


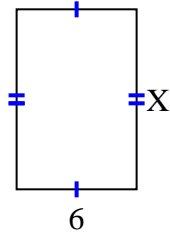


Find the value of X for each figure. Each figure is in centimeters (cm). Not to scale.

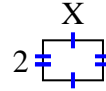
1) area = 8 cm^2



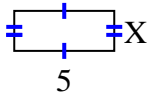
2) area = 54 cm^2



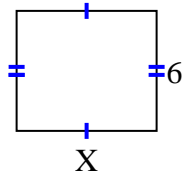
3) area = 6 cm^2



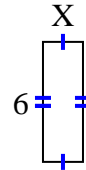
4) area = 10 cm^2



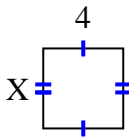
5) area = 42 cm^2



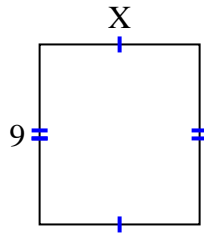
6) area = 12 cm^2



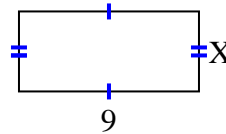
7) area = 16 cm^2



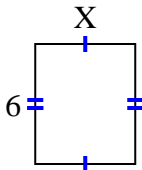
8) area = 72 cm^2



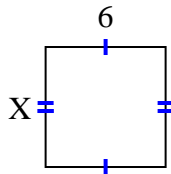
9) area = 36 cm^2



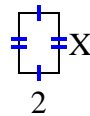
10) area = 30 cm^2



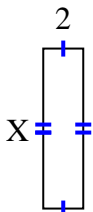
11) area = 36 cm^2



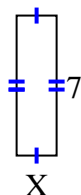
12) area = 6 cm^2



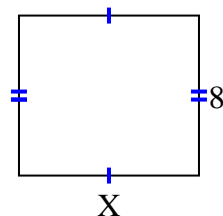
13) area = 16 cm^2



14) area = 14 cm^2



15) area = 72 cm^2



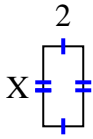
Answers

1. _____
2. _____
3. _____
4. _____
5. _____
6. _____
7. _____
8. _____
9. _____
10. _____
11. _____
12. _____
13. _____
14. _____
15. _____

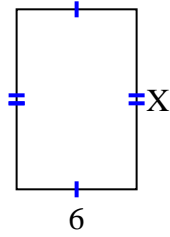


Find the value of X for each figure. Each figure is in centimeters (cm). Not to scale.

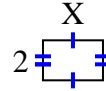
1) area = 8 cm^2



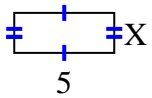
2) area = 54 cm^2



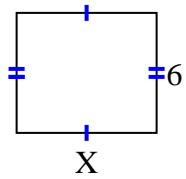
3) area = 6 cm^2



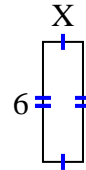
4) area = 10 cm^2



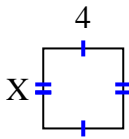
5) area = 42 cm^2



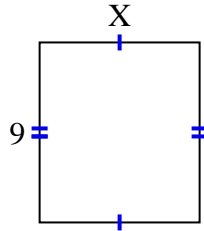
6) area = 12 cm^2



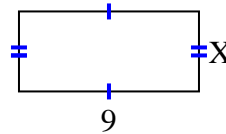
7) area = 16 cm^2



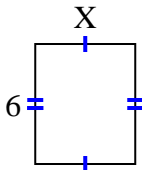
8) area = 72 cm^2



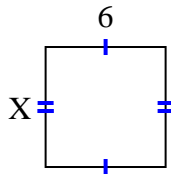
9) area = 36 cm^2



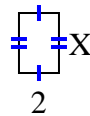
10) area = 30 cm^2



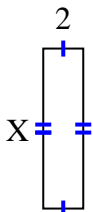
11) area = 36 cm^2



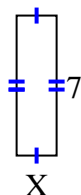
12) area = 6 cm^2



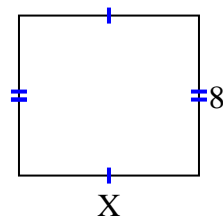
13) area = 16 cm^2



14) area = 14 cm^2



15) area = 72 cm^2



Answers

1. 4

2. 9

3. 3

4. 2

5. 7

6. 2

7. 4

8. 8

9. 4

10. 5

11. 6

12. 3

13. 8

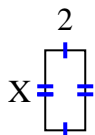
14. 2

15. 9

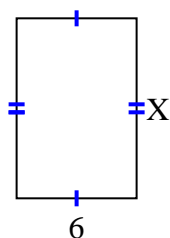


Find the value of X for each figure. Each figure is in centimeters (cm). Not to scale.

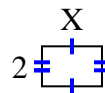
1) area = 8 cm^2



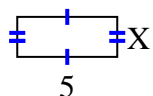
2) area = 54 cm^2



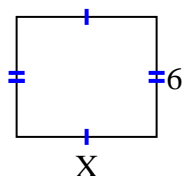
3) area = 6 cm^2



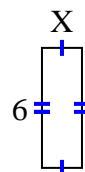
4) area = 10 cm^2



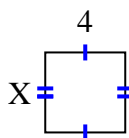
5) area = 42 cm^2



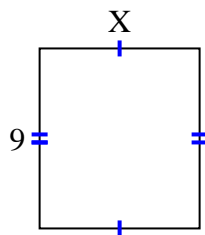
6) area = 12 cm^2



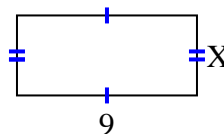
7) area = 16 cm^2



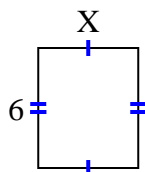
8) area = 72 cm^2



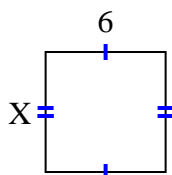
9) area = 36 cm^2



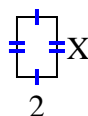
10) area = 30 cm^2



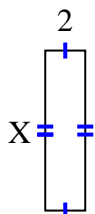
11) area = 36 cm^2



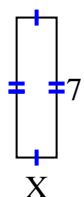
12) area = 6 cm^2



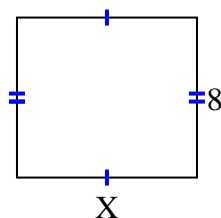
13) area = 16 cm^2



14) area = 14 cm^2



15) area = 72 cm^2



Answers

1. _____
2. _____
3. _____
4. _____
5. _____
6. _____
7. _____
8. _____
9. _____
10. _____
11. _____
12. _____
13. _____
14. _____
15. _____